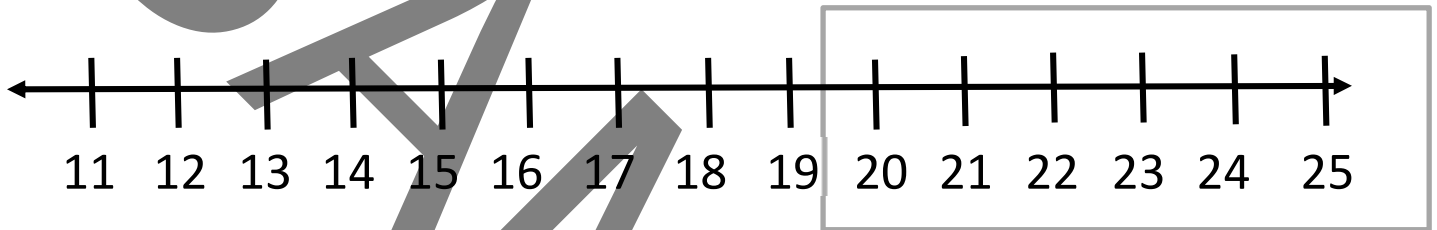


 **Comparing Whole Numbers**
Explore Activity Sheet

Put a ● on the number line for each number.

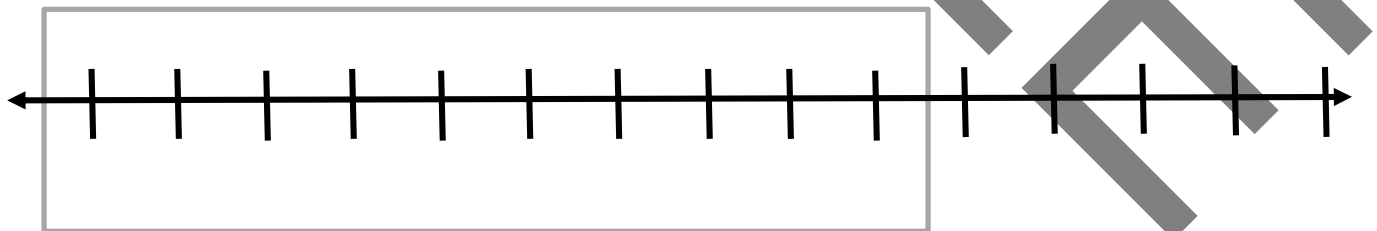
15 22 14 11 23



1. Which numbers are in the gray box?

Put a ● on the number line for each number.

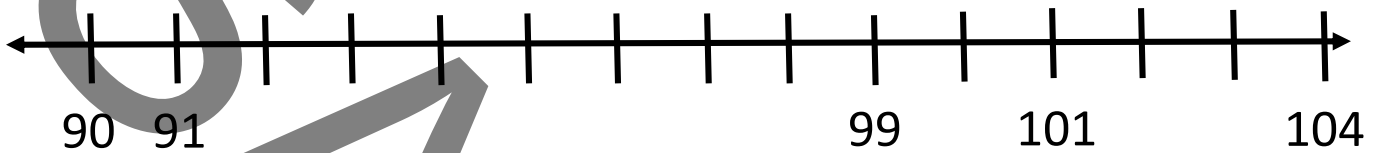
91 103 97 101 93



2. Which numbers are in the gray box?

Put a ● on the number line for each number.

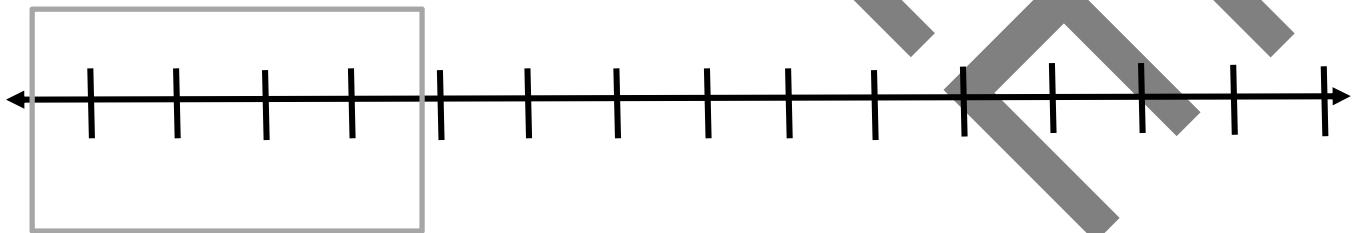
102	93	98	100	95
-----	----	----	-----	----



3. Put an X where **89** would go on this number line.

Put numbers and a ● on the number line for each number.

110	106	117	120	108
-----	-----	-----	-----	-----



4. Which numbers go in the gray box?

Put these numbers in order. Use the 0-99 chart or a number line to help you.

5.

11

7

12

6.

62

53

68

7.

101

117

111

8. Cal has 8 pennies. Bry has 12 pennies. Sally has 11 pennies. Circle the one that shows the numbers in order from east to greatest?

11, 7, 12

12, 11, 7

7, 11, 12

9. Dani just had a birthday. She is between 4 and 7 years old. Circle how old Dani could be.

3

5

8